

つぎの たしざんを してください。

■中級⑥ / 1 - 数(c)

①  $28 + 64 = 92$  ⑧  $37 + 49 = 86$

②  $56 + 27 = 83$  ⑨  $38 + 38 = 76$

③  $18 + 75 = 93$  ⑩  $46 + 39 = 85$

④  $68 + 15 = 83$  ⑪  $49 + 45 = 94$

⑤  $37 + 47 = 84$  ⑫  $14 + 49 = 63$

⑥  $36 + 36 = 72$  ⑬  $69 + 29 = 98$

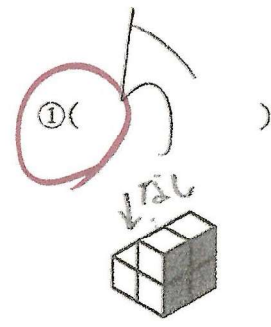
⑦  $55 + 27 = 82$  ⑭  $44 + 38 = 82$

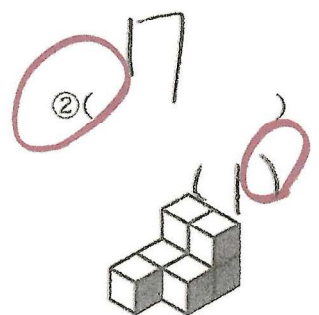
# 積み木の問題

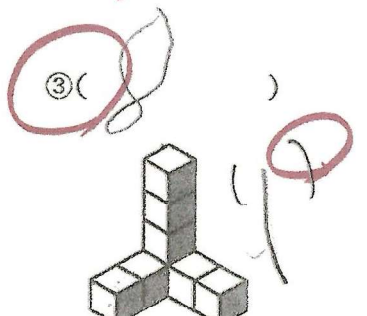
数と見えない数

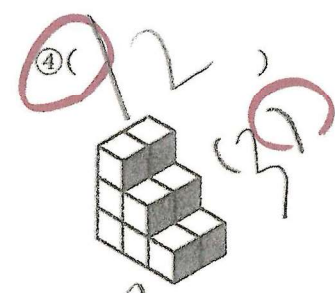
[中級 H-10-11-3]


*good*


① ( )  


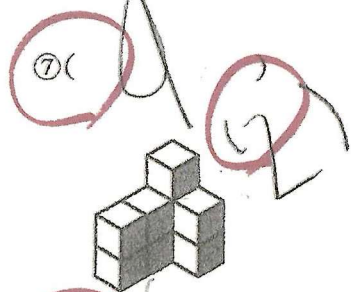
② ( )  



③ ( )  



④ ( )  


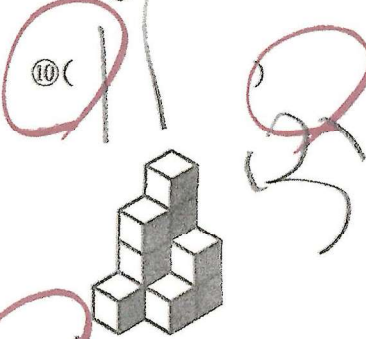
⑤ ( )  


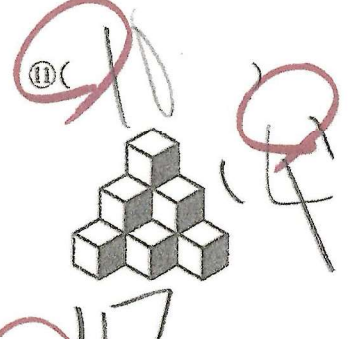
⑥ ( )  


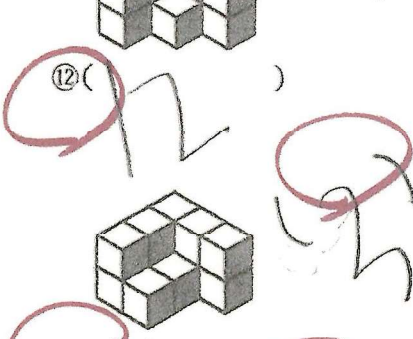
⑦ ( )  


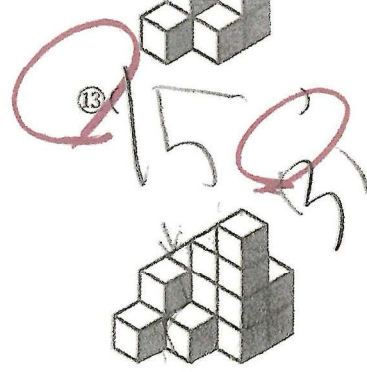
⑧ ( )  


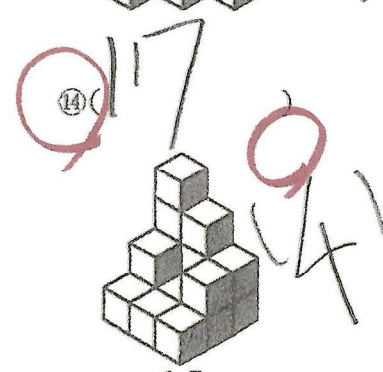
⑨ ( )  


⑩ ( )  


⑪ ( )  


⑫ ( )  


⑬ ( )  


⑭ ( )  


⑮ ( )  
